
Exercises to Relativistic Quantum Field Theory — Sheet 12

— Prof. S. Dittmaier, Universität Freiburg, SS18 —

Exercise 12.1 “Massive photon” in the Abelian Higgs model (1.5 points)

Consider a model with a complex scalar field $\phi(x)$ whose dynamics is governed by the Lagrangian

$$\mathcal{L}_\phi(\phi, \partial\phi) = |\partial\phi|^2 - V(\phi^*\phi),$$

where V represents a general potential for the scalar self-interactions. Moreover, the quanta of ϕ carry the electric charge q , so that the full Lagrangian for ϕ including its electromagnetic interaction reads

$$\mathcal{L} = \mathcal{L}_\phi(\phi, D\phi) - \frac{1}{4}F_{\mu\nu}F^{\mu\nu}$$

with the covariant derivative $D_\mu = \partial_\mu + iqA_\mu$ and the field-strength tensor $F_{\mu\nu} = \partial_\mu A_\nu - \partial_\nu A_\mu$ of the electromagnetic field $A^\mu(x)$.

- a) The potential $V(\phi)$ is assumed to have a minimum for $|\phi(x)| \equiv v/\sqrt{2}$, so that this condition characterises the ground state of the system (= field configuration of lowest energy). This suggests the following parametrisation of ϕ :

$$\phi(x) = \frac{1}{\sqrt{2}}(v + h(x)) \exp\left(\frac{i\chi(x)}{v}\right),$$

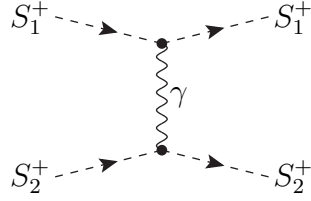
where $h(x)$ and $\chi(x)$ are real fields. Express \mathcal{L} in terms of $h(x)$, $\chi(x)$, and $A^\mu(x)$.

- b) Show that the model respects the gauge symmetry $\phi(x) \rightarrow \phi'(x) = e^{-iq\omega(x)}\phi(x)$, $A_\mu(x) \rightarrow A'_\mu(x) = A_\mu(x) + \partial_\mu\omega(x)$ and argue that $\chi(x)$ is an unphysical field, i.e. that it can be consistently set to zero.
- c) From \mathcal{L} with $\chi = 0$, read off the part $\mathcal{L}_{AA,0}$ that is responsible for the free motion of A . Derive the Euler-Lagrange equation from $\mathcal{L}_{AA,0}$ for the free motion of A and identify the mass M_A of the quanta of A by comparing the equation of motion with Proca's equation.

Exercise 12.2 Electromagnetic scattering of two charged scalars (2 points)

Consider the reaction $S_1^+(p_1) + S_2^+(p_2) \rightarrow S_1^+(k_1) + S_2^+(k_2)$ in scalar quantum electrodynamics, i.e. the particles S_a^\pm ($a = 1, 2$) are scalar particles with electric charges $\mp Q_a e$ and masses M_a . The corresponding Feynman rules are given at the end of the exercise. In Born approximation only the following diagram is relevant.

Please turn over!



In the centre-of-mass frame the particle momenta read

$$p_{1,2}^\mu = (E_{1,2}, 0, 0, \pm p), \quad k_{1,2}^\mu = (E_{1,2}, \pm p \sin \theta \cos \varphi, \pm p \sin \theta \sin \varphi, \pm p \cos \theta),$$

where $E_{1,2}$ are the energies of the incoming particles, and $p = \sqrt{E_a^2 - M_a^2}$ is the absolute value of their three-momenta.

- Calculate the squared transition matrix element $|\mathcal{M}|^2$ as a function of the Mandelstam variables $s = (p_1 + p_2)^2$, $t = (p_1 - k_1)^2$, and $u = (p_1 - k_2)^2$.
- Calculate the differential cross section

$$\frac{d\sigma}{d\Omega} = \frac{1}{64\pi^2 s} |\mathcal{M}|^2.$$

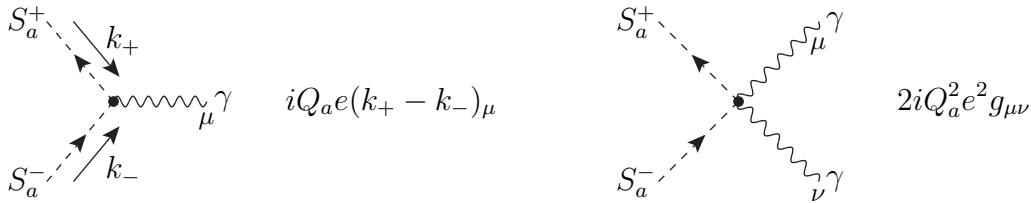
Compare the non-relativistic limit ($m_1, m_2 \gg p$) of the result with the classical Rutherford cross section

$$\left(\frac{d\sigma}{d\Omega}\right)_{\text{Rutherford}} = \frac{\alpha^2 Q_1^2 Q_2^2}{4M^2 v^4 \sin^4(\frac{\theta}{2})},$$

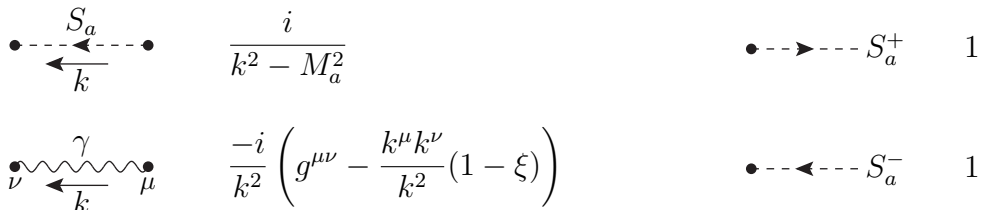
where in this limit $v = p/M$ and $M = M_1 M_2 / (M_1 + M_2)$ denote the relative velocity and the reduced mass of the two-body system, respectively, and $\alpha = e^2 / (4\pi)$ is the fine-structure constant.

Feynman rules for the charged spin-0 particles S_a^\pm

- Vertices:



- Propagators and external lines:



The fields S_a^\pm are defined to be incoming at the vertices. Outgoing fields S_a^\pm correspond to incoming fields S_a^\mp with reversed momenta.