

---

**Exercises to Relativistic Quantum Field Theory — Sheet 12**

— Prof. S. Dittmaier, Universität Freiburg, SS16 —

---

**Exercise 12.1** “Massive photon” in the Abelian Higgs model (1.5 points)

Consider a model with a complex scalar field  $\phi(x)$  whose dynamics is governed by the Lagrangian

$$\mathcal{L}_\phi(\phi, \partial\phi) = |\partial\phi|^2 - V(\phi^*\phi),$$

where  $V$  represents a general potential for the scalar self-interactions. Moreover, the quanta of  $\phi$  carry the electric charge  $q$ , so that the full Lagrangian for  $\phi$  including its electromagnetic interaction reads

$$\mathcal{L} = \mathcal{L}_\phi(\phi, D\phi) - \frac{1}{4}F_{\mu\nu}F^{\mu\nu}$$

with the covariant derivative  $D_\mu = \partial_\mu + iqA_\mu$  and the field-strength tensor  $F_{\mu\nu} = \partial_\mu A_\nu - \partial_\nu A_\mu$  of the electromagnetic field  $A^\mu(x)$ .

- a) The potential  $V(\phi)$  is assumed to have a minimum for  $|\phi(x)| \equiv v/\sqrt{2}$ , so that this condition characterises the ground state of the system (= field configuration of lowest energy). This suggests the following parametrisation of  $\phi$ :

$$\phi(x) = \frac{1}{\sqrt{2}}(v + h(x)) \exp\left(\frac{i\chi(x)}{v}\right),$$

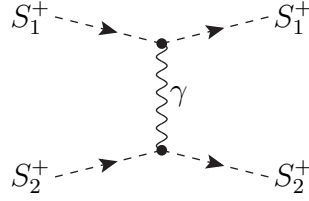
where  $h(x)$  and  $\chi(x)$  are real fields. Express  $\mathcal{L}$  in terms of  $h(x)$ ,  $\chi(x)$ , and  $A^\mu(x)$ .

- b) Show that the model respects the gauge symmetry  $\phi(x) \rightarrow \phi'(x) = e^{-iq\omega(x)}\phi(x)$ ,  $A_\mu(x) \rightarrow A'_\mu(x) = A_\mu(x) + \partial_\mu\omega(x)$  and argue that  $\chi(x)$  is an unphysical field, i.e. that it can be consistently set to zero.
- c) From  $\mathcal{L}$  with  $\chi = 0$ , read off the part  $\mathcal{L}_{AA,0}$  that is responsible for the free motion of  $A$ . Derive the Euler-Lagrange equation from  $\mathcal{L}_{AA,0}$  for the free motion of  $A$  and identify the mass  $M_A$  of the quanta of  $A$  by comparing the equation of motion with Proca's equation.

**Exercise 12.2** Electromagnetic scattering of two charged scalars (2 points)

Consider the reaction  $S_1^+(p_1) + S_2^+(p_2) \rightarrow S_1^+(k_1) + S_2^+(k_2)$  in scalar quantum electrodynamics, i.e. the particles  $S_a^\pm$  ( $a = 1, 2$ ) are scalar particles with electric charges  $\mp Q_a e$  and masses  $M_a$ . The corresponding Feynman rules are given at the end of the exercise. In Born approximation only the following diagram is relevant.

*Please turn over!*



In the centre-of-mass frame the particle momenta read

$$p_{1,2}^\mu = (E_{1,2}, 0, 0, \pm p), \quad k_{1,2}^\mu = (E_{1,2}, \pm p \sin \theta \cos \varphi, \pm p \sin \theta \sin \varphi, \pm p \cos \theta),$$

where  $E_{1,2}$  are the energies of the incoming particles, and  $p = \sqrt{E_a^2 - M_a^2}$  is the absolute value of their three-momenta.

- Calculate the squared transition matrix element  $|\mathcal{M}|^2$  as a function of the Mandelstam variables  $s = (p_1 + p_2)^2$ ,  $t = (p_1 - k_1)^2$ , and  $u = (p_1 - k_2)^2$ .
- Calculate the differential cross section

$$\frac{d\sigma}{d\Omega} = \frac{1}{64\pi^2 s} |\mathcal{M}|^2.$$

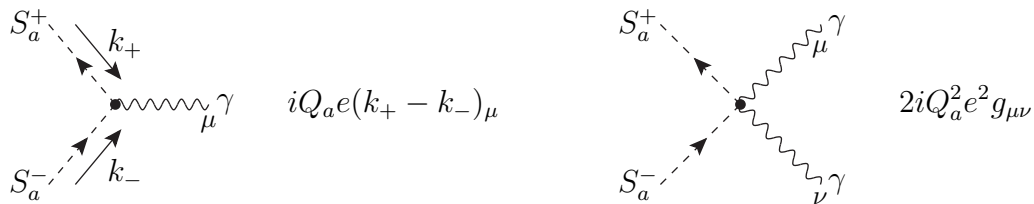
Compare the non-relativistic limit ( $m_1, m_2 \gg p$ ) of the result with the classical Rutherford cross section

$$\left(\frac{d\sigma}{d\Omega}\right)_{\text{Rutherford}} = \frac{\alpha^2 Q_1^2 Q_2^2}{4M^2 v^4 \sin^4(\frac{\theta}{2})},$$

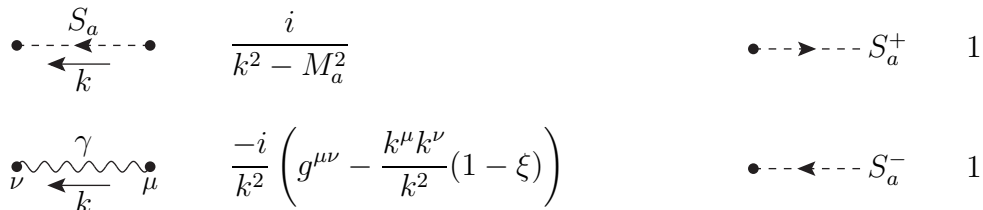
where in this limit  $v = p/M$  and  $M = M_1 M_2 / (M_1 + M_2)$  denote the relative velocity and the reduced mass of the two-body system, respectively, and  $\alpha = e^2 / (4\pi)$  is the fine-structure constant.

*Feynman rules for the charged spin-0 particles  $S_a^\pm$*

- Vertices:



- Propagators and external lines:



The fields  $S_a^\pm$  are defined to be incoming at the vertices. Outgoing fields  $S_a^\pm$  correspond to incoming fields  $S_a^\mp$  with reversed momenta.